

Nome : Data :

Centenas, Dezenas e Unidades (C, D, U)

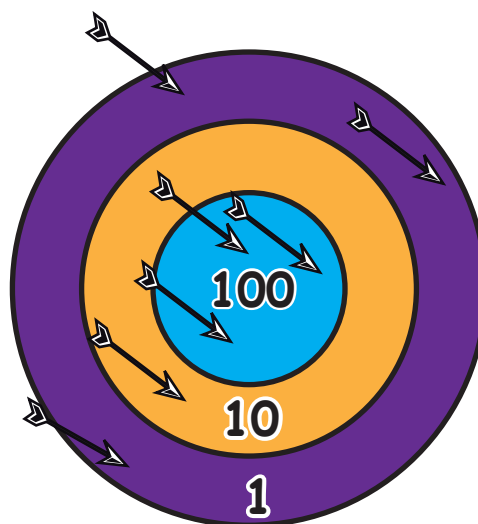
Observa o exemplo e descobre as pontuações.

100 = Centenas

10 = Dezenas

1 = Unidades

| C | D | U |
|---|---|---|
| 3 | 1 | 3 |



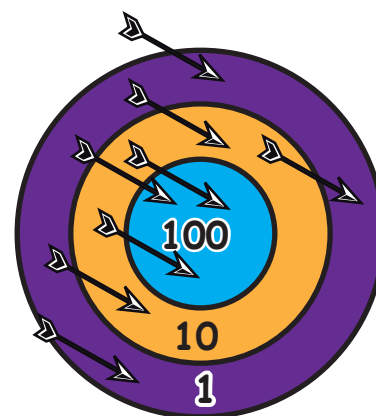
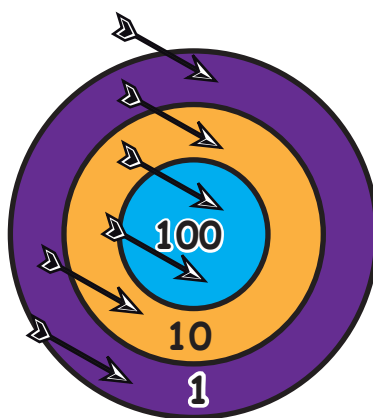
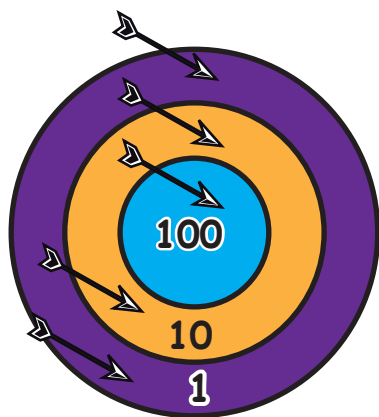
Pontuação

C = 300

D = 10

U = 3

313



C D U

1.

| |
|--|
| |
| |

C D U

2.

| |
|--|
| |
| |

C D U

3.

| |
|--|
| |
| |

Explica, por palavras tuas, o que aprendeste.

